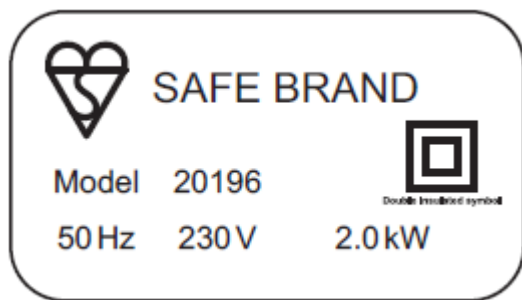


GCSE Physics B (Twenty First Century Science)
J259/02 Depth in physics (Foundation Tier)

Question Set 11

1 Kareem is researching a kettle to buy for his grandad.

(a) This is the label for one kettle he found on the Internet.



Kareem makes the following comment.

The domestic supply in the UK is alternating.
The power of this kettle is 2000 W.

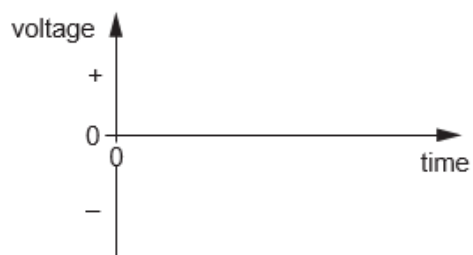
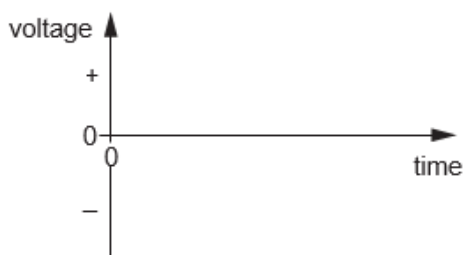


(a) (i) What is the frequency and potential difference (voltage) of the domestic supply in the UK? [1]

(ii) On the axes, sketch a graph for a direct voltage and an alternating voltage.

direct voltage

alternating voltage



(iii) The power of the kettle is 2000 W. [3]

How many joules of energy are transferred by the kettle in a time of 1 second?

Energy = J [1]

(b) The table shows data on three kettles **A**, **B** and **C** found by Kareem.

Kettle	Power (W)	Lifetime of kettle (hours of use)	Total energy transferred (kWh)
A	1500	400	
B	2000	200	400
C	2500	100	250

(i) Calculate the total energy, in kilowatt hours (kWh), transferred by kettle **A** during its lifetime.

Use the equation: energy transferred = power × time

[3]

Total energy transferred = kWh

(ii) Which kettle, **A**, **B** or **C**, will take the longest time to boil **one** litre of water?

Give **one** reason for your answer.

[2]

(c) What is the name of the device used to change low-voltage to high-voltage at power stations?

Put a **ring** around the correct answer.

diode National Grid thermistor transformer

[1]

Total Marks for Question Set 11: 11

OCR

Oxford Cambridge and RSA

Copyright Information

OCR is committed to seeking permission to reproduce all third-party content that it uses in its assessment materials. OCR has attempted to identify and contact all copyright holders whose work is used in this paper. To avoid the issue of disclosure of answer-related information to candidates, all copyright acknowledgements are reproduced in the OCR Copyright Acknowledgements Booklet. This is produced for each series of examinations and is freely available to download from our public website (www.ocr.org.uk) after the live examination series.

If OCR has unwittingly failed to correctly acknowledge or clear any third-party content in this assessment material, OCR will be happy to correct its mistake at the earliest possible opportunity.

For queries or further information please contact The OCR Copyright Team, The Triangle Building, Shaftesbury Road, Cambridge CB2 8EA.

OCR is part of the Cambridge Assessment Group; Cambridge Assessment is the brand name of University of Cambridge Local Examinations Syndicate (UCLES), which is itself a department of the University of Cambridge